


Name: _____



Draw a picture and **write** an equation to show how you solved each math problem.

You have a family of 4 people. Each person wants 3 pancakes for breakfast.
How many pancakes do you need? _____






There are 6 people at the picnic.
Four people want 2 hamburgers. Two people want 1 hamburger.
How many hamburgers do you need to cook? _____



Five people are coming for strawberry shortcake.
Each strawberry shortcake needs 2 pieces of cake and 6 strawberries.

How many pieces of cake do you need? _____
How many strawberries do you need? _____

You are making trail mix for yourself and a friend. Here is the recipe for one serving. Fill in the boxes to show how many of each item you need for 2 servings.

<i>One serving</i>	<i>Ingredients</i>	<i>How many for 2 servings?</i>
10	Cranberries 	
5	Peanuts 	
4	Pretzel sticks 	
8	Cheerios 